

Popper 02 ← Bubble correctly.

Let $f(x) = x^2 + 10x + 24$ be a quadratic function. Find:

$$f(x) = x^2 + 10x + 24 = 0$$

$$(x+6)(x+4) = 0 \Rightarrow \begin{array}{l} x = -6 \\ x = -4 \end{array}$$

① x-intercept(s)

- A. $\{-6, -4\}$ B. $\{6, 4\}$ C. 24 D. none

② y-intercept = $f(0) = 0^2 + 10 \cdot 0 + 24 = 24 \Rightarrow (0, 24)$

- A. $(0, 0)$ B. $(24, 0)$ C. $(0, 24)$ D. none

$$x = \frac{-b}{2a} = \frac{-10}{2 \cdot 1} = -5$$

③ Vertex coordinates

$$y = f(-5) = (-5)^2 + 10(-5) + 24 = -1$$

- A. $(5, -1)$ B. $(-5, 1)$ C. $(-5, -1)$ D. none

④ Maximum / Minimum Value - upward - vertex minimum

A. max. value

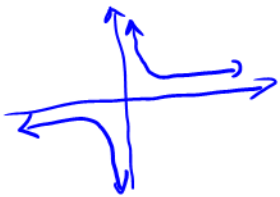
$$f(-5) = -1$$

B. min. value

$$f(-5) = -1$$

C. there is no
max/min.

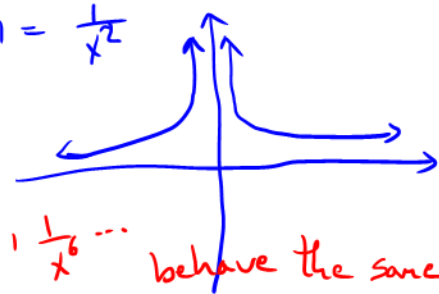
Recall $f(x) = \frac{1}{x}$. Also $f(x) = \frac{1}{x^3}, \frac{1}{x^5}, \dots$



behave

the same Math 1330 - Section 2.3
Rational Functions

$$f(x) = \frac{1}{x^2}$$



Also $f(x) = \frac{1}{x^4}, \frac{1}{x^6}, \dots$ behave the same.

A rational function is a function of the form $f(x) = \frac{P(x)}{Q(x)}$, where P and Q are polynomial functions and $Q(x) \neq 0$. You'll need to be able to find the following features of the graph of a rational function and then use the information to sketch the graph.

- Domain
- Intercepts
- Holes
- Vertical asymptotes
- Horizontal asymptote
- Slant asymptote
- Behavior near the vertical asymptotes

ex. $f(x) = \frac{x^2 - 2x}{x^2 - 4}$ rational

Domain: The domain of f is all real numbers except those values for which $Q(x) = 0$.

$$f(x) = \frac{x^2 - 2x}{x^2 - 4}$$

$$x^2 - 4 = 0$$

$$(x-2)(x+2) = 0$$

$$x = 2, -2$$

\Rightarrow domain =

$$(-\infty, -2) \cup (-2, 2) \cup (2, \infty)$$

x intercept(s): The x intercept(s) of the function will be all values of x for which $P(x) = 0$, but $Q(x) \neq 0$. Before finding any x-int., factor!!!

$$f(x) = \frac{x^2 - 2x}{x^2 - 4} = \frac{x(x-2)}{(x+2)(x-2)}$$

If some factor simplified, then it can't be x -int. It is a hole.
 $\Rightarrow x=0$ is the x -intercept.

y intercept: The y intercept of the function is $f(0)$.

$$\hookrightarrow y = f(0) = \frac{0^2 - 2 \cdot 0}{0^2 - 4} = 0 \quad \leftarrow \text{just substitute zero in } x.$$

Holes: The graph of the function will have a hole at any value of x for which both $P(x) = 0$ and $Q(x) = 0$.

$$f(x) = \frac{x(x-2)}{(x+2)(x-2)}$$

If a factor is simplified from both $P(x)$ & $Q(x)$, then it is a hole.

$$\Rightarrow x-2=0 \Rightarrow x=2 \text{ a hole}$$

Location of this hole is in the graph at $f^*(2) = \frac{2}{2+2} = \frac{1}{2} \Rightarrow \left(2, \frac{1}{2}\right)$

$$f^*(x) = \frac{x}{x+2}$$

Vertical asymptotes: The graph of the function has a vertical asymptote at any value of x for which $Q(x) = 0$ but $P(x) \neq 0$.

$$f(x) = \frac{x(x-2)}{(x+2)(x-2)} = \frac{x}{x+2}$$

First, always simplify the hole factors.

$$x+2=0 \Rightarrow \boxed{x=-2}$$

Horizontal asymptote: You can determine if the graph of the function has a horizontal asymptote by comparing the degree of the numerator with the degree of the denominator.

$$f(x) = \frac{1 \cdot x^2 - 2x}{1 \cdot x^2 - 4}, \text{ degrees match} \Rightarrow y = \frac{1}{1} = 1$$

There are three cases

I if the degree of the numerator is smaller than the degree of the denominator, then the graph of the function has a horizontal asymptote at $y=0$.

ex. $f(x) = \frac{x+4}{x^3+2x-2} \Rightarrow y=0$ H.A.

II if the degree of the numerator is equal to the degree of the denominator, then the graph of the function has a horizontal asymptote at

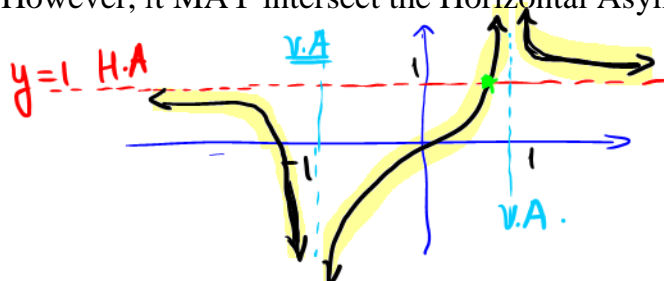
$$y = \frac{\text{leading coefficient of numerator}}{\text{leading coefficient of denominator}}$$

ex. $f(x) = \frac{3x^2-5}{4x^2+2x-1} \Rightarrow y = \frac{3}{4}$ H.A.

III if the degree of the numerator is greater than the degree of the denominator, then the graph of the function does not have a horizontal asymptote.

ex. $f(x) = \frac{x^8+2x-3}{100x^2+2} \Rightarrow \text{No H.A.}$

Note: The graph of a function $f(x)$ can never intersect the Vertical Asymptote. However, it MAY intersect the Horizontal Asymptote.



Look at highlighted graph. This graph does not touch V.A., but it touches the H.A.

To be continued on Tuesday, 02/09.

Example: Given $f(x) = \frac{x-2}{x^2-1}$, find the point at which $f(x)$ intersects the HA.

First, find HA

$\rightarrow y=0$, then take $f(x) = 0 \leftarrow$ HA value

$$\frac{x-2}{x^2-1} = 0 \text{ iff } x-2=0$$

$$\boxed{x=2}$$

Example: Given $f(x) = \frac{x^2-2x+2}{x^2-x}$, find the point at which $f(x)$ intersects the HA.

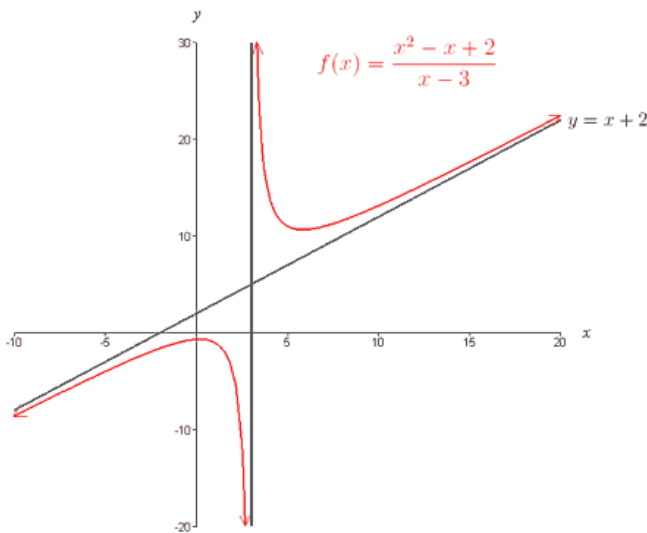
First, find HA $\rightarrow y = \frac{1}{1} = 1$.

Then, say $f(x) = 1$ i.e. $\frac{x^2-2x+2}{x^2-x} = 1$

$$\Rightarrow \cancel{x^2} - 2x + 2 = \cancel{x^2} - x$$

$$\Rightarrow \boxed{x=2}$$

Slant asymptote: The graph of the function may have a slant asymptote if the degree of the numerator is greater than the degree of the denominator. To find the equation of the slant asymptote, use long division to divide the denominator into the numerator. The quotient is the equation of the slant asymptote.



Slant asymptotes occur for $f(x) = \frac{P(x)}{Q(x)}$, when $\deg P(x)$ is one bigger than $\deg Q(x)$.

Long Division: Quotient = slant

$$\begin{array}{r} x+2 \\ x-3 \overline{) x^2 - x + 2} \\ \underline{-(x^2 - 3x)} \\ 2x + 2 \\ \underline{-(2x - 6)} \\ 8 \end{array}$$

8 Remainder

$$f(x) = (x+2) + \frac{8}{x-3}$$

Examples: Practice Long Division to get these results:

$$f(x) = \frac{x^2 + 4}{x} = x + \frac{4}{x}; \text{ the slant asymptote is: } y = x.$$

$$f(x) = \frac{2x^2 + 1}{x} = 2x + \frac{1}{x}; \text{ the slant asymptote is: } y = 2x.$$

$$f(x) = \frac{x^2 - 2}{x - 1} = x + 1 - \frac{1}{x - 1}; \text{ the slant asymptote is: } y = x + 1.$$

$$f(x) = \frac{x^2 + x}{x - 2} = \text{Quotient} + \frac{\text{Remainder}}{x - 2}; \text{ the slant asymptote is: } y = \text{Quotient}.$$

ALWAYS → FOLLOW THE FLOW of FUNCTION!

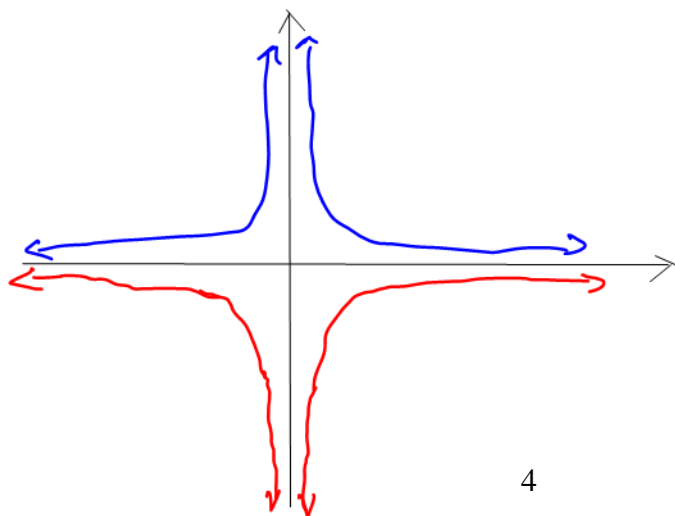
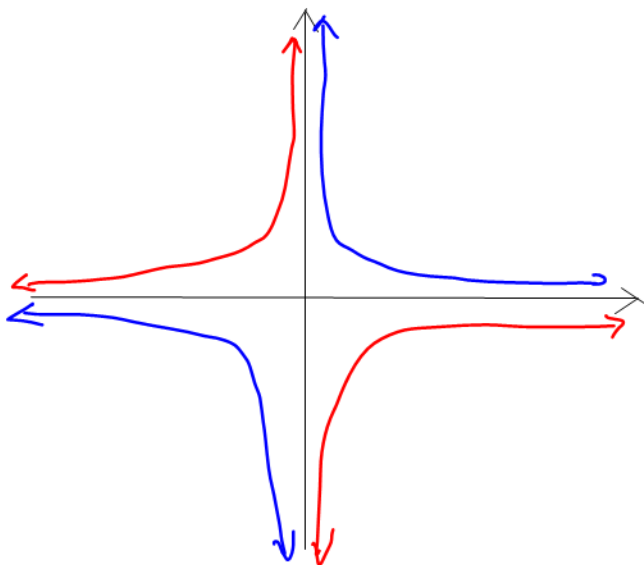
Behavior near the vertical asymptotes: The graph of the function will approach either ∞ or $-\infty$ on each side of the vertical asymptotes. To determine if the function values are positive or negative in each region, find the sign of a test value close to each side of the vertical asymptotes.

$$f(x) = \frac{1}{x}, \frac{1}{x^3}, \frac{1}{x^5} \dots \text{ (same shape)}$$

$$f(x) = \frac{-1}{x}, \frac{-1}{x^3}, \frac{-1}{x^5} \text{ (same shape)}$$

$$f(x) = \frac{1}{x^2}, \frac{1}{x^4}, \frac{1}{x^6} \dots$$

$$f(x) = \frac{-1}{x^2}, \frac{-1}{x^4}, \frac{-1}{x^6} \dots$$



Example 1: Sketch the graph of: of $f(x) = \frac{2x^2 - 8}{x^2 - 3x + 2}$. Factor $= \frac{2(x^2 - 4)}{(x-1)(x-2)} = \frac{2(x+2)(x-2)}{(x-1)(x-2)}$

• domain: $x \neq 1, x \neq 2 \Rightarrow (-\infty, 1) \cup (1, 2) \cup (2, \infty)$

• At $x=2$, graph has a hole
 $f(x) = \frac{2(x+2)}{x-1} \Rightarrow f(2) = \frac{2(2+2)}{2-1} = 8$
 $(2, 8)$ hole

• x-int $\Rightarrow x+2=0$
 $x = -2$ $(-2, 0)$ x-int

• y-int $\Rightarrow f(0) = \frac{2(0+2)}{0-1} = -4$
 $(0, -4)$ y-int

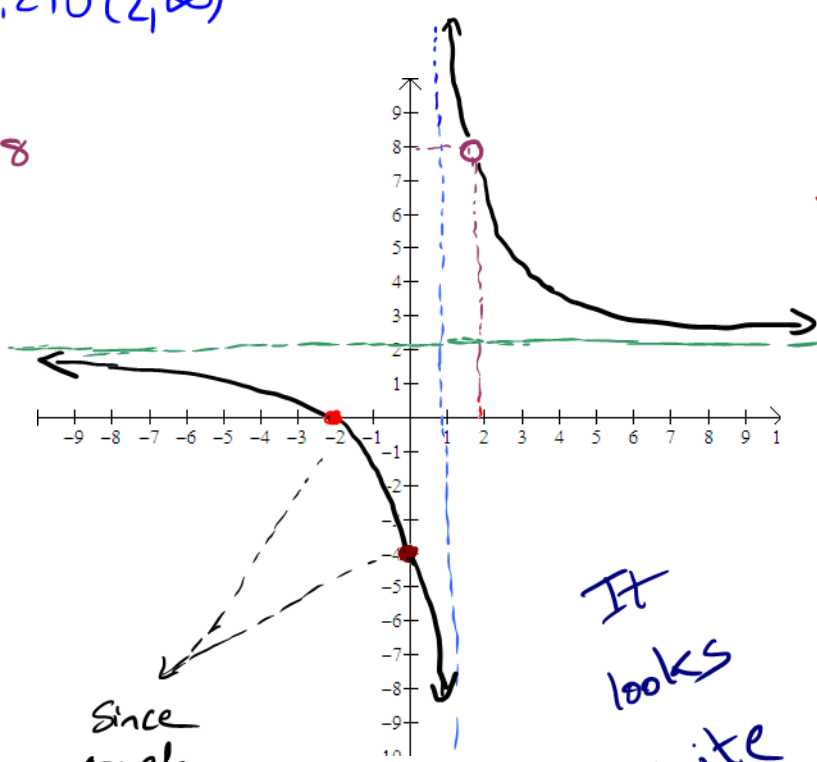
• V.A. $x-1=0$
 $x=1$ V.A.

• H.A. $\Rightarrow y = \frac{2}{1} = 2$ H.A.

Does f cut H.A. $y=2$? No!

$f(x) = \frac{2(x+2)}{x-1} = 2 \Rightarrow$ no solution

Solve:
 $\frac{2(x+2)}{x-1} = \frac{2}{1}$ cross-product
 $2(x+2) \cdot 1 = 2(x-1)$
 $x+2 = x-1$
 $2 \neq -1$



Since graph passes through those points then it should be on this side

It looks quite fancy

(Sometimes, you may skip long division)

Example 2: Sketch the graph of: $f(x) = \frac{x^4 - 16}{x^3} = \frac{x^4}{x^3} - \frac{16}{x^3} = x - \frac{16}{x^3}$

• Long division

$$x^3 \overline{) x^4 - 16}$$

$$\underline{-x^4}$$

$$-16$$

• Slant asymptote: $y = x$

• domain: $x \neq 0$
 $(-\infty, 0) \cup (0, \infty)$

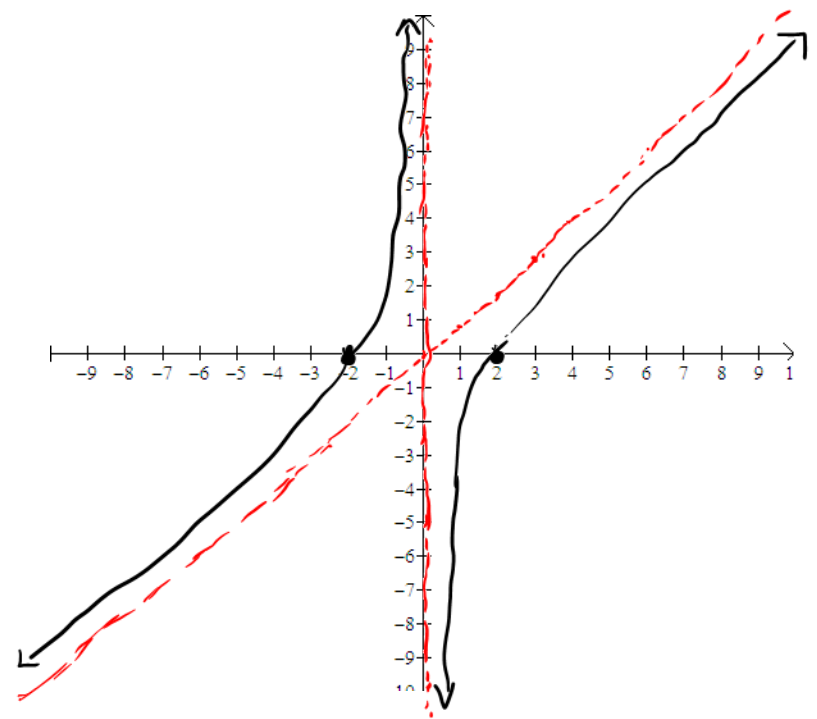
• V.A: $x = 0$

• H.A. none

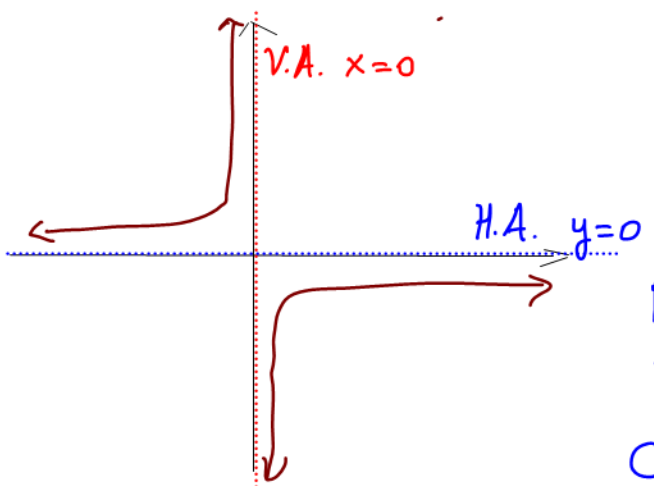
• x-int: $f(x) = 0$
 $\frac{x^4 - 16}{x^3} = 0 \Rightarrow x^4 - 16 = 0$
 $x = \pm 2$

• y-int: none

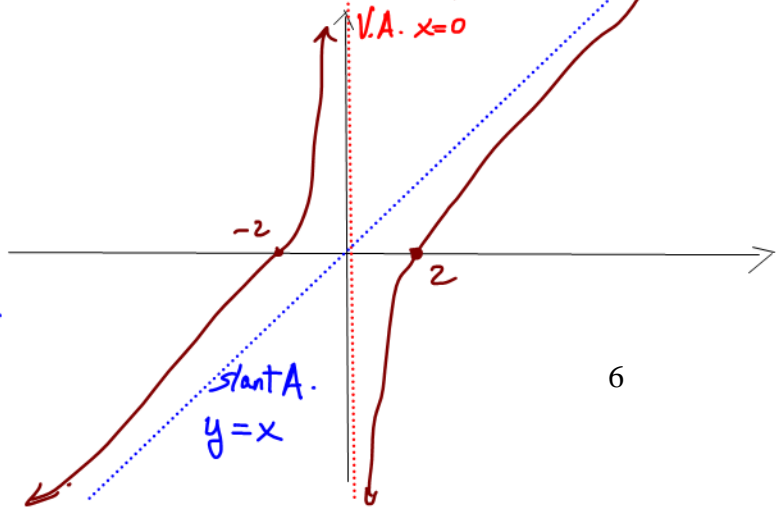
• holes: none



Look at $y = -\frac{16}{x^3}$



Look at $y = x - \frac{16}{x^3}$



NOTICE
 \Rightarrow
 The
 CHANGE

Exercise (Do on your own)

Exercise: Find all of the features of $f(x) = \frac{x^3 - 4x^2}{x^2 - 2x - 8}$ and use them to graph the function.

$$f(x) = \frac{x^2(x-4)}{(x-4)(x+2)} = \frac{x^2}{x+2}$$

⇒ domain: $x \neq 4, x \neq -2$
 $(-\infty, -2) \cup (-2, 4) \cup (4, \infty)$

⇒ f has a hole at $x=4$

$$f(4) = \frac{4^2}{4+2} = \frac{16}{6} = \frac{8}{3}$$

⇒ x-int: $f(x) = 0$

$$\frac{x^2}{x+2} = 0 \Rightarrow x^2 = 0$$

$x = 0$ parabola

⇒ y-int: $y = f(0) = \frac{0^2}{0+2} = 0$

⇒ V.A. $x+2=0 \Rightarrow x = -2$

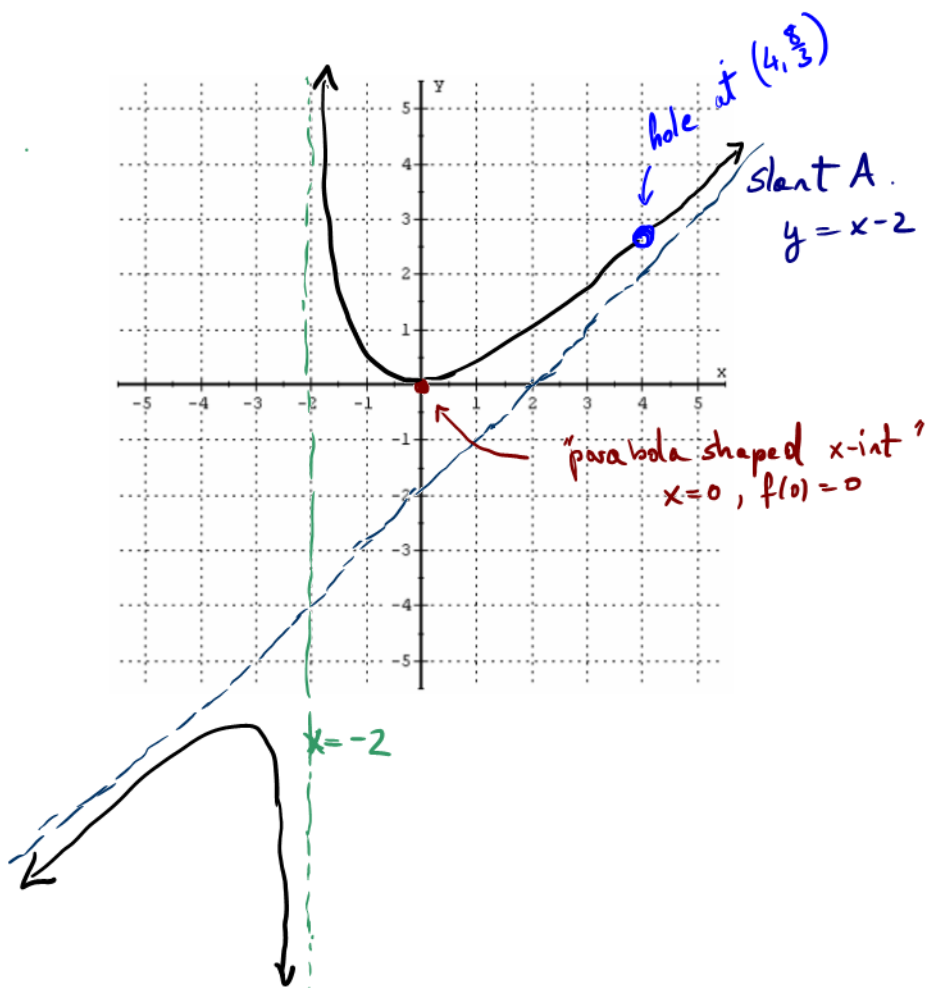
⇒ H.A. none

⇒ Slant A. $f(x) = \frac{x^2}{x+2} = x-2 + \frac{4}{x+2}$

Long division

$$\begin{array}{r} x-2 \\ x+2 \overline{) x^2} \\ \underline{-(x^2+2x)} \\ -2x \\ \underline{-(-2x-4)} \\ 4 \end{array} = y$$

$$y = x-2$$



Another fancy graph!