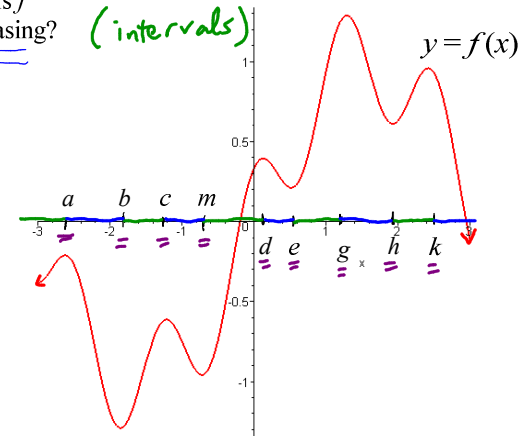


Info...

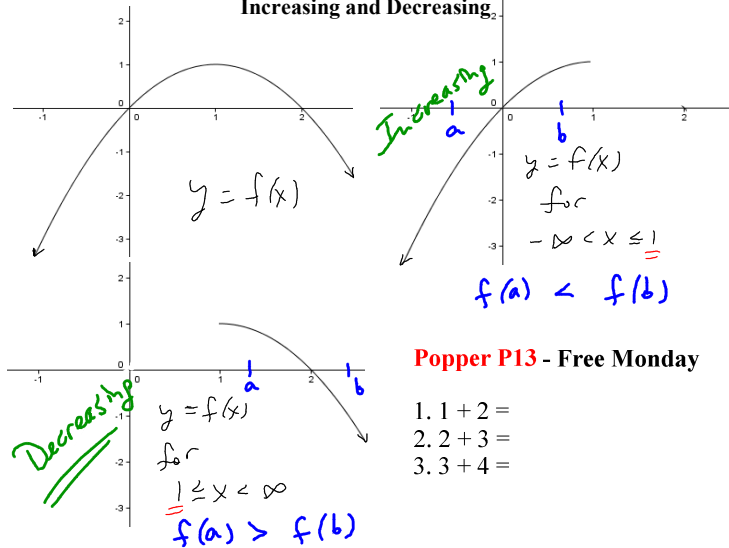
- We will cover portions of 4.2 and 4.3 today.
- Homework and EMCFs are posted.
- Online Quiz 5 is due tonight at 11:59pm.
- Practice Test 2 is due tonight at 11:59pm.
- Please complete Online Quizzes 6 and 7 asap.
- Today is the last day to take Test 2.

Increasing and Decreasing Functions

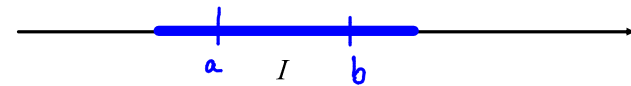
Intuitively, where is f increasing? Decreasing?



Restricted Views Illustrating Increasing and Decreasing



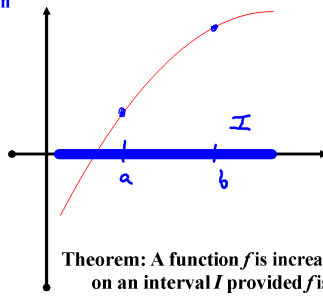
Algebraic Definitions of Increasing and Decreasing on an Interval



f is increasing on I if and only if $f(a) < f(b)$ whenever $a, b \in I$ and $a < b$.

f is decreasing on I if and only if $f(a) > f(b)$ whenever $a, b \in I$ and $a < b$.

Definition: f is increasing over an interval I if and only if $f(a) < f(b)$ for all a, b in I with $a < b$.

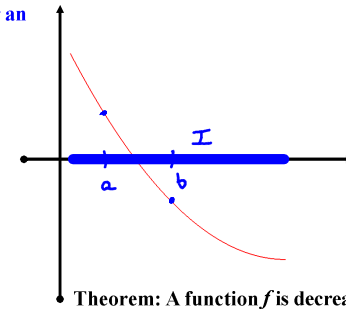


Theorem: A function f is increasing on an interval I provided f is continuous and $f'(x) > 0$ at all but finitely many values in I .

What property does the derivative have on this interval?

mostly positive

Definition: f is decreasing over an interval I if and only if $f(a) > f(b)$ for all a, b in I with $a < b$.



Theorem: A function f is decreasing on an interval I provided f is continuous and $f'(x) < 0$ at all but finitely many values in I .

What property does the derivative have on this interval?

mostly negative

Example: Determine the intervals of increase and decrease for

the function $f(x) = \frac{1}{3}x^3 + \frac{5}{2}x^2 + 6x - 3$

Important Idea: Slope chart

$f'(x) = x^2 + 5x + 6$

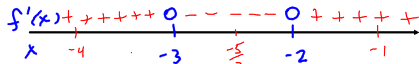
Set $f'(x) = 0$

$x^2 + 5x + 6 = 0 \Leftrightarrow (x+2)(x+3) = 0$
 $x = -2$ or $x = -3$

Popper P13 - Free Monday

- 4. 1-2 =
- 5. 2-3 =
- 6. 3-4 =

Slope Chart

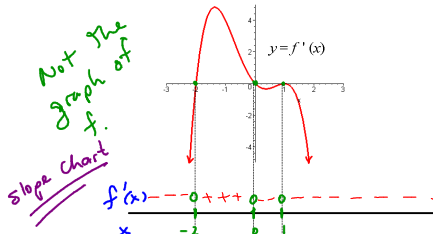


$f'(-4) = (-)(-)$ $f'(-\frac{5}{2}) = (-)(+)$ $f'(-1) = (+)(+)$
 $= +$ $= -$ $= +$

f is increasing on $(-\infty, -3]$ and $[2, \infty)$
 f is decreasing on $[-3, -2]$.

round to integers will be accepted EVEN THOUGH THEY ARE WRONG.

Example: The graph of $y = f'(x)$ is shown below. Give the interval(s) on which f is increasing, and the interval(s) on which f is decreasing.



f is increasing on $[-2, 0]$.
 f is decreasing on $(-\infty, -2]$, $[0, \infty)$

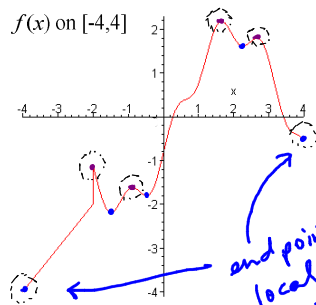
Question: Can you determine the shape of the graph of f ?

rough shape

local maximums
and
minimums

Local vs Absolute Extrema

local highs
and
lows



Question: Can you identify the local extreme values of this function?

yes

end point
local
extrema.

Question: In general, what does it mean to say that a function f has a local extreme value at $x = c$?

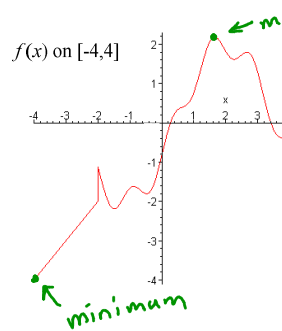
Question: Does every function have a largest value?

No. Ex. $f(x) = x$ for $-\infty < x < \infty$
 Ex. $g(x) = \begin{cases} \frac{1}{x}, & -1 \leq x < 0 \text{ or } 0 < x \leq 1 \\ 7, & x = 0 \end{cases}$

Theorem: A continuous function f on a closed bounded interval $[a, b]$ has both an absolute maximum value and an absolute minimum value on the interval $[a, b]$.

This is the Extreme Value Theorem!!

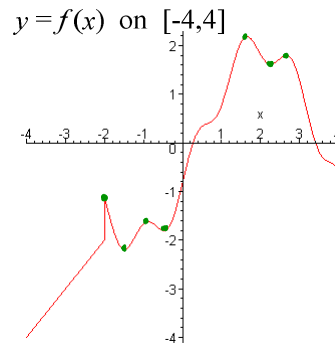
Remark: If no interval is specified, then we have to assume that all values of x are valid, so long as they can be put in the function.



Question: Can you identify the absolute extreme values of this function?

maximum or
minimum
(Not local.)

Question: In general, what does it mean to say that a function f has an absolute extreme value at $x = c$?



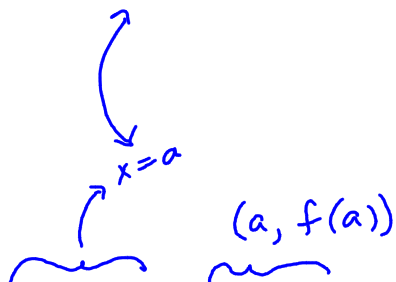
Question: What will be true about f' at a value of x where f has a local extreme value?

$f'(x) = 0$
or
 $f'(x)$ dne

Note: These values of x are so important that we give them a special name... Critical Numbers.

Critical Numbers

The value $x = a$ is a critical number for f if and only if a is in the domain of f and either $f'(a) = 0$ or $f'(a)$ does not exist.



We can classify critical numbers and critical points as either local maximums or local minimums by using the slope chart.

This is called the first derivative test.

Example: Find the critical numbers for the function $f(x) = \frac{1}{3}x^3 + \frac{1}{2}x^2 - 6x + 2$.

Then classify each of the critical numbers as places where the function has a local minimum, local maximum or neither.

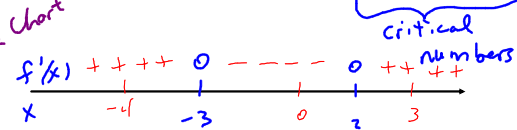
$$f'(x) = x^2 + x - 6 \leftarrow \text{polynomial defined for all } x.$$

$$\text{Set } f'(x) = 0$$

$$x^2 + x - 6 = 0 \iff (x+3)(x-2) = 0$$

$$x = -3, x = 2$$

slope chart



$$f'(-4) = + \quad f'(0) = - \quad f'(3) = +$$

local shape for f

local max at x = -3

local min at x = 2

Example: The graph of $y = f'(x)$ is shown below. Classify the critical numbers of f .

